

TEKART LEARNING

P. 2 MATHEMATICS WEEKEND HOMEWORK TERM III, WEEK TWO

NAME: _____ STREAM: _____

SECTION A

1. Take away $9 - 7 =$

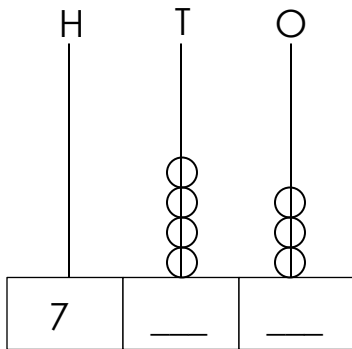
2. Write 124 in words

124 = _____

3. Find the next number in the sequence.

6, 8, 10, 12, _____.

4. Complete the abacus.



5. Draw a square using a ruler and a pencil in the space below.

6. Expand 185 using values.

185 = _____ + _____ + _____


7. Divide; $2\overline{)48}$

8. Show the time on the clock face below.



It is a half past 6.

9. Ring in twos and write the groups.

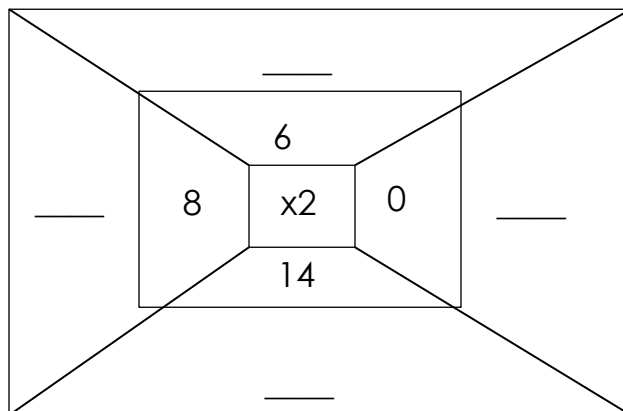


_____ groups

10. Find the place value of 2 in 3248.

SECTION B

11(a) Workout and fill in;



(b) How many tens make 50?

12. Lambert has 10 pencils. Praise has 15 pencils.


(a) Who has more pencils?

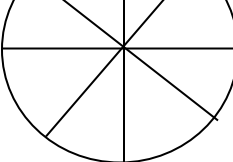
(b) Who has less pencils?

(c) Write Praise's number of pencils in words.

(d) How many pencils do they have altogether?

13. Shade these fractions.

(a) $\frac{2}{5}$ 

(b) $\frac{6}{8}$ 

(c) Add the fractions.

